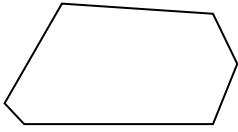




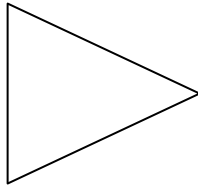
Count the number of Acute, Obtuse and Right angles inside each shape.

Answers

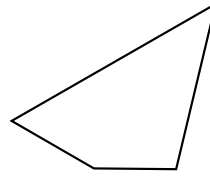
Ex)



1)



2)



Ex. 0 6 0

1. _____

2. _____

3. _____

4. _____

5. _____

6. _____

7. _____

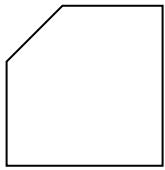
8. _____

9. _____

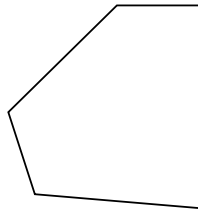
10. _____

11. _____

3)



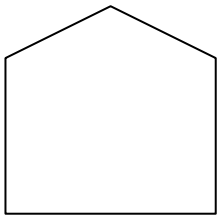
4)



5)



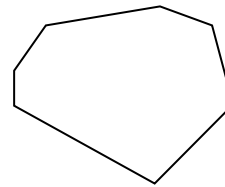
6)



7)



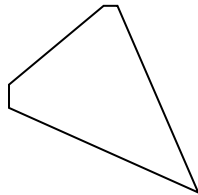
8)



9)



10)



11)

